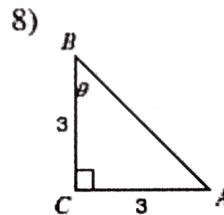
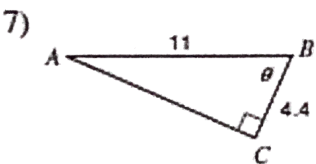
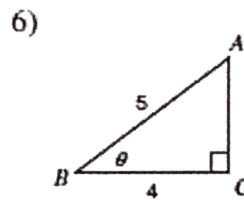
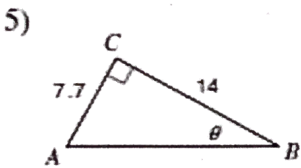
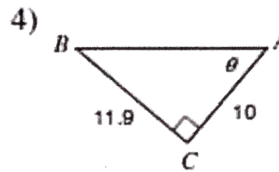
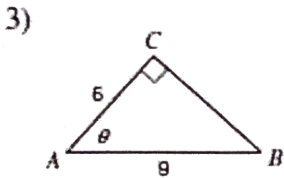
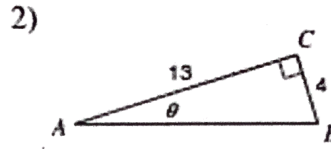
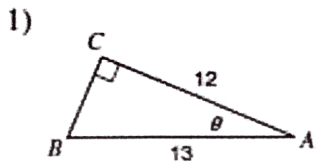
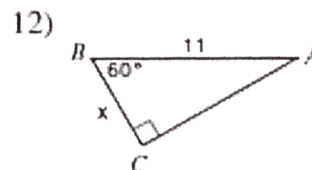
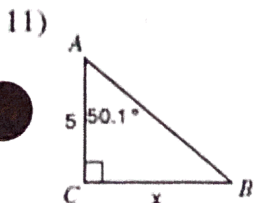
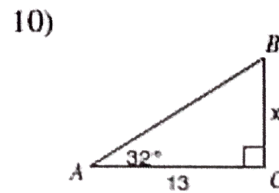
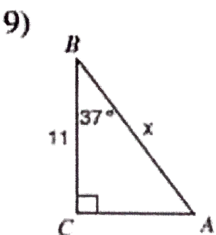


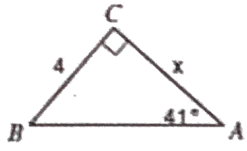
Find the measure of each angle indicated. Round to the nearest tenth.



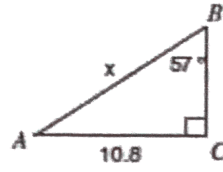
Find the measure of each side indicated. Round to the nearest tenth.



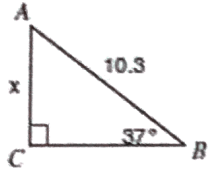
13)



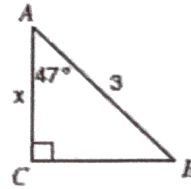
14)



15)



16)



Answers: 1. 22.6° 2. 17.1° 3. 48.2° 4. 50.0° 5. 28.8° 6. 36.9° 7. 66.4° 8. 45.0° 9. 13.8 10. 8.1
 11. 6.0 12. 5.5 13. 4.6 14. 12.9 15. 6.2 16. 2.0